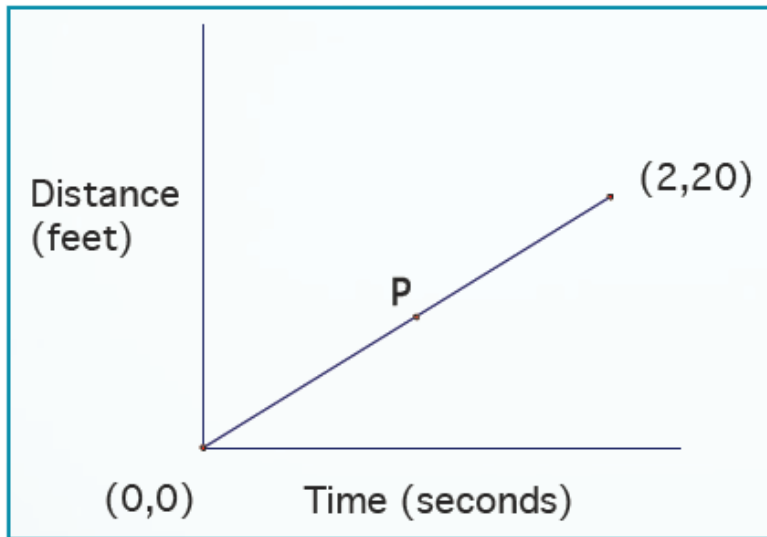


Chapter 3 Derivatives



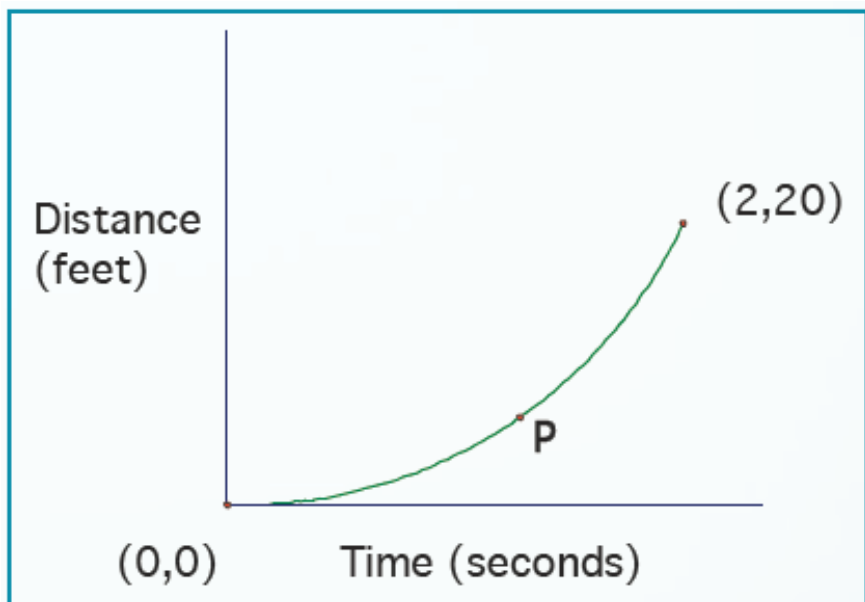


What is the slope of the line?

What is the average rate of change from $t=0$ to $t=2$?

What is the slope at point P ?

What is the average rate of change at point P ?




What is the average rate of change from $t=0$ to $t=2$?

What is the average slope?

What is the slope at point P?

What is the rate of change at point P?

Definitions

- ▶ Average rate of change: slope between two points
 - ▶ Instantaneous rate of change: slope or rate of change at a specific point, also called the derivative at a point
 - ▶ Derivative: equation used to calculate slopes/derivatives at specific points on a function
- 

- ▶ For linear graphs, average and instantaneous rates of change are the same
- ▶ For all other graphs, average and instantaneous rates are not the same
- ▶ If you travel 100 miles in 2 hours, your average rate of change is 50 mph, but your instantaneous rate of change varies from moment to moment during the 2 hour period.

History Note p139

MINE!



GOTTFRIED
LEIBNIZ

ISAAC
NEWTON



MINE!

Notation

Given function $f(x)$

$f'(x)$ = derivative of function f

$f'(3)$ = derivative of function f at $x = 3$

$f''(x)$ = derivative of $f'(x)$
or the 2nd derivative of $f(x)$

$f'''(x)$ = derivative of $f''(x)$
or the 3rd derivative of $f(x)$

$f^n(x)$ = the n th derivative of f .

Given equation y

y' = derivative of equation y

$y'(3)$ = derivative of y at $x = 3$

y'' = derivative of y'
or the 2nd derivative of y

y''' = derivative of y''
or the 3rd derivative of y

y^n = n th derivative of y

Use of the prime marks is also known as Lagrange notation.

Leibniz Notation

$$\frac{dy}{dx} = \text{derivative of } y \text{ with respect to } x$$

$$\frac{d}{dx} \left(\frac{dy}{dx} \right) = \frac{d^2 y}{dx^2} = \text{2nd derivative of } y$$

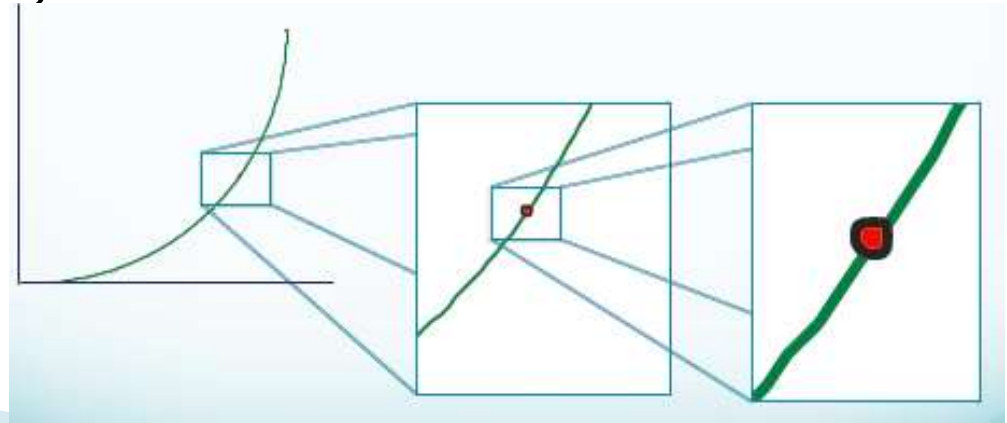
$$\frac{d}{dx} \left(\frac{d^2 y}{dx^2} \right) = \frac{d^3 y}{dx^3} = \text{3rd derivative of } y$$

$$f'(x) \approx y' \approx \frac{dy}{dx} = \text{1st derivative}$$

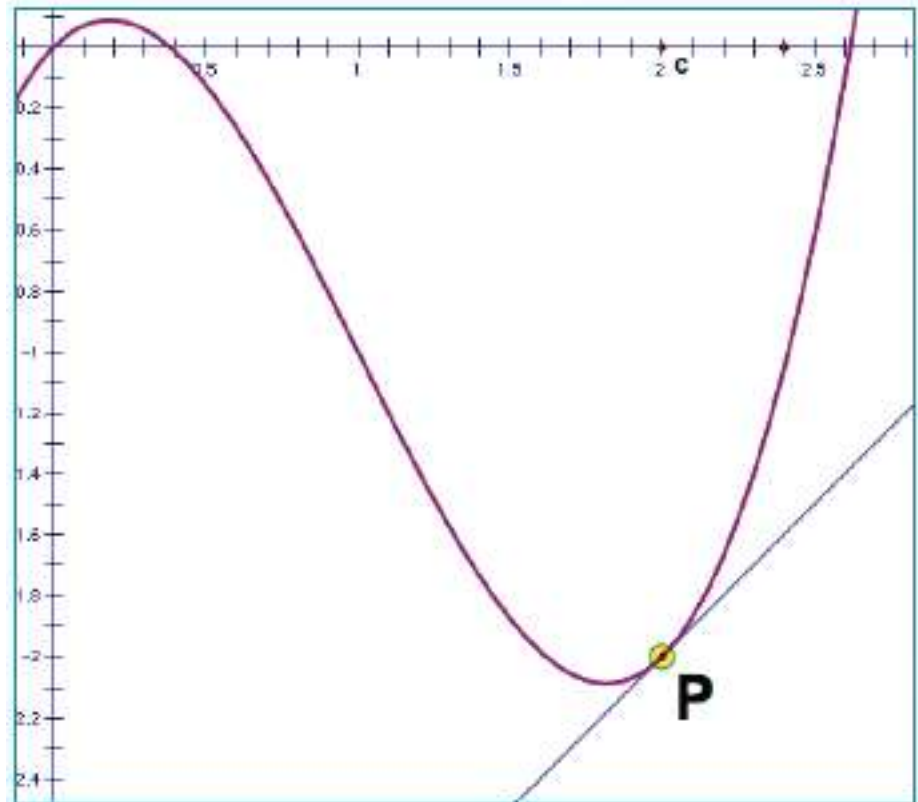
$$f''(x) \approx y'' \approx \frac{d^2y}{dx^2} = \text{2nd derivative}$$

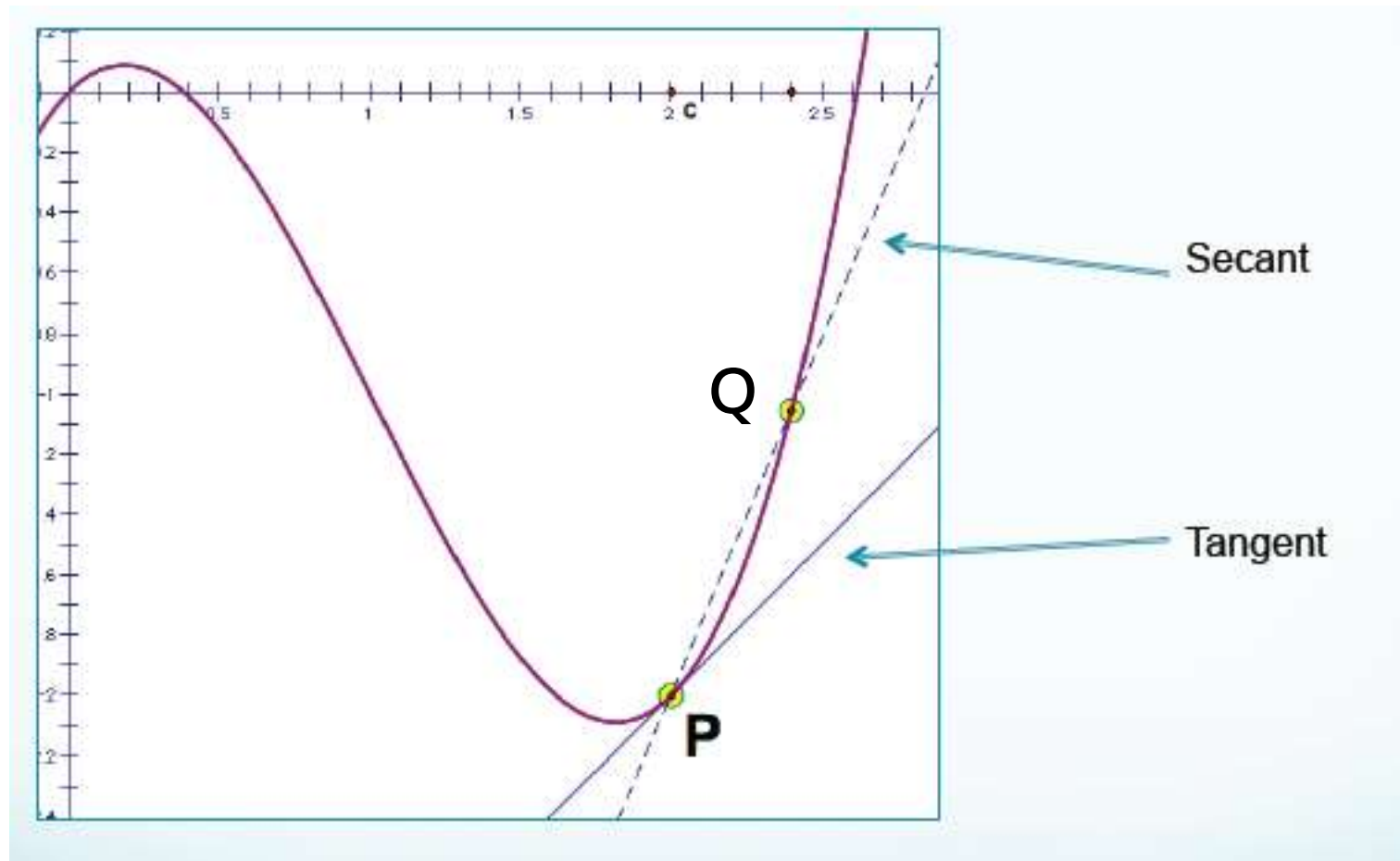
How to find the derivative

- ▶ If graph is linear, use the slope formula
- ▶ If graph is curved, local linearization could be a way to approximate
- ▶ **Local Linearity**: at a point, a curve behaves indistinguishably from a straight line; when you zoom in a curve, it looks like a line

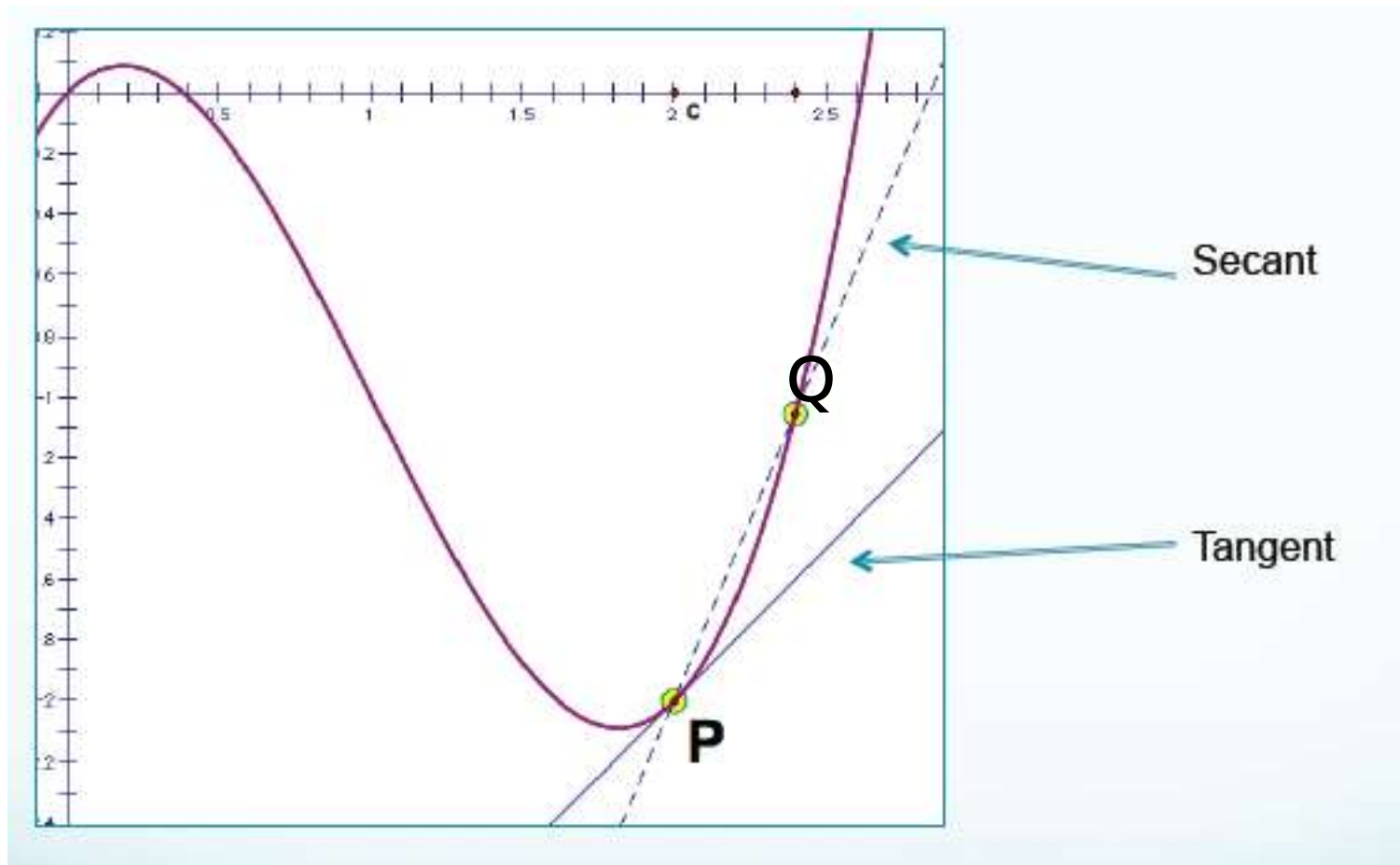


The derivative of a function at a point is the slope of the tangent line at that point.

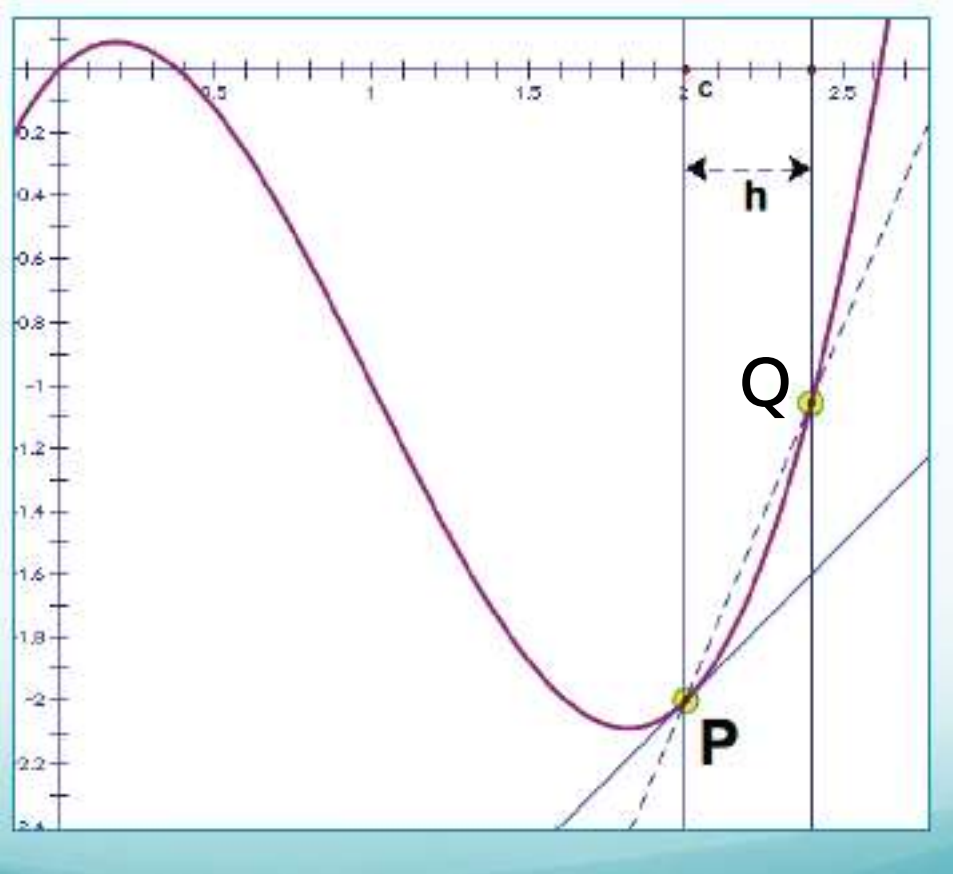




- ▶ Let's pick a second point and draw a secant line and use its slope to estimate the tangent's slope.



As Q gets closer to P, the slope of the secant will approach the slope of the tangent line. (As seen on sketchpad demo)



$P(x, f(x))$ $Q(x + h, f(x + h))$

$$\text{Slope of secant} = \frac{f(x+h) - f(x)}{x+h-x}$$

Slope of tangent =

$$\lim_{h \rightarrow 0} \frac{f(x+h) - f(x)}{x+h-x} =$$

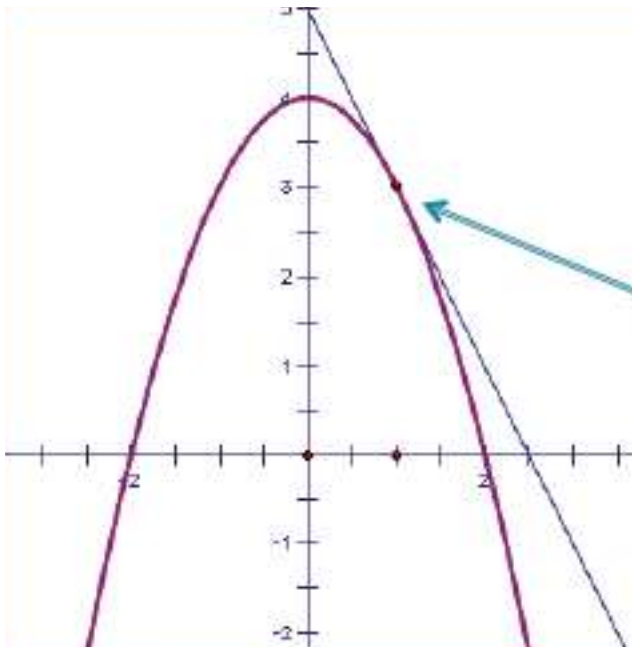
$$\lim_{h \rightarrow 0} \frac{f(x+h) - f(x)}{h} = f'(x)$$

$$f(x) = 4 - x^2$$

Find $f'(1)$

$$\lim_{h \rightarrow 0} \frac{f(x+h) - f(x)}{h} = f'(x)$$

What does $f'(1) = -2$ mean?



The slope of the tangent line at $x = 1$ is -2 .

If you have a point and the slope, you can write the equation for the tangent line.

Or the equation of the line normal to the tangent line at $x = 1$.

You try: $y = \frac{3}{x}$

- ▶ Find a) $y'(3)$
- ▶ b) write the equation of the tangent line and normal line at $x = 3$