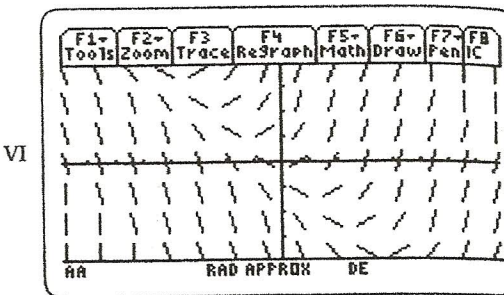
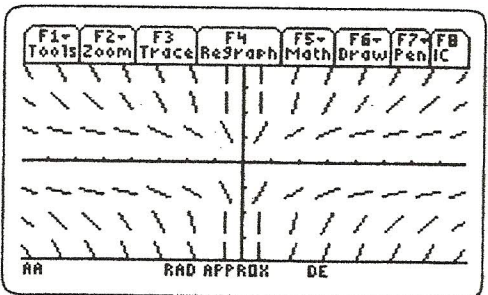
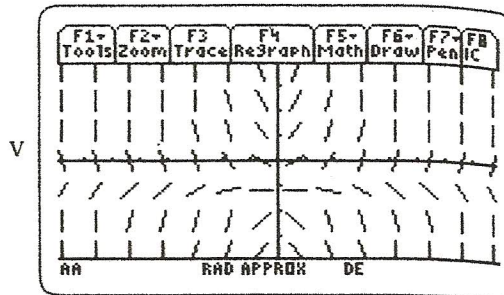
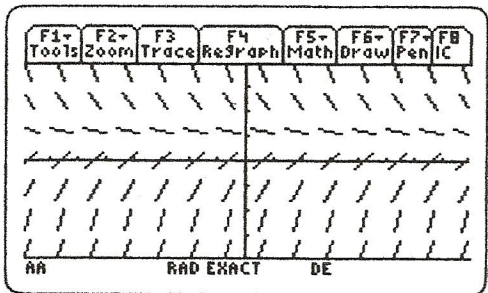
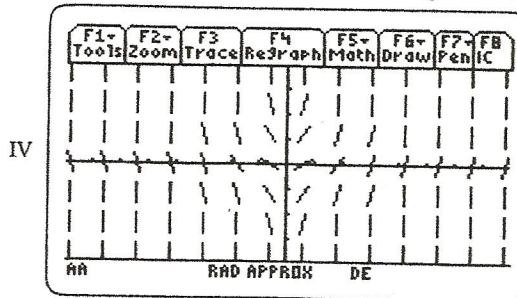
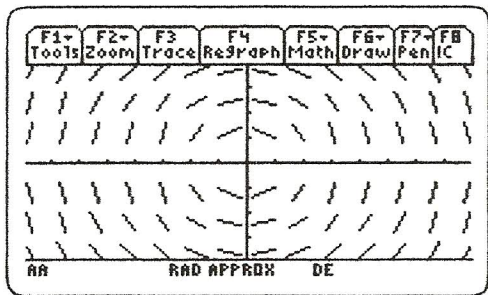


Slope Fields Practice

Name _____

Match the Differential Equation to its Slope field.



1. $\frac{dy}{dx} = x + xy^2$

4. $\frac{dy}{dx} = \frac{y^2}{x}$

2. $\frac{dy}{dx} = -\frac{x}{y}$

5. $\frac{dy}{dx} = x + y$

3. $\frac{dy}{dx} = -y + 1$

6. $\frac{dy}{dx} = x + xy$